



Mental Maths


Monday

- $22 + 12 = \underline{\quad}$
- $18 - 9 = \underline{\quad}$
- Write one hundred and eighteen $\underline{\quad}$
- How many groups of 5? $\underline{\quad}$

- Write the number before 119 $\underline{\quad}$
- 55, 60, 65, $\underline{\quad}$
- Double 11 $\underline{\quad}$
- What is 15 more than 40? $\underline{\quad}$
- Circle the largest 94, 49, 192, 291
- $20 + 5 + 5 = \underline{\quad}$


Tuesday

- $19 + 11 = \underline{\quad}$
- $35 - 11 = \underline{\quad}$
- Write ninety four $\underline{\quad}$
- How many groups of 2? $\underline{\quad}$

- Write the number after 256 $\underline{\quad}$
- 90, 100, 110, $\underline{\quad}$
- Double 15 $\underline{\quad}$
- What is 15 more than 110? $\underline{\quad}$
- Circle the largest 181, 811, 118, 818
- $50 + 15 + 5 = \underline{\quad}$

Wednesday


- $24 + 9 = \underline{\quad}$
- $15 - 7 = \underline{\quad}$
- Write two hundred and eleven $\underline{\quad}$
- How many groups of 4? $\underline{\quad}$

- Write the number before 99 $\underline{\quad}$
- 11, 13, 15, $\underline{\quad}$
- Double 25 $\underline{\quad}$
- What is 15 more than 250? $\underline{\quad}$
- Circle the largest 15, 51, 511, 151
- $27 + 3 + 10 = \underline{\quad}$

Thursday


- $63 + 11 = \underline{\quad}$
- $43 - 12 = \underline{\quad}$
- Write eighty seven $\underline{\quad}$
- How many groups of 3? $\underline{\quad}$

- Write the number after 312 $\underline{\quad}$
- 99, 97, 95, $\underline{\quad}$
- Double 12 $\underline{\quad}$
- What is 15 more than 15? $\underline{\quad}$
- Circle the largest 22, 222, 214, 221
- $73 + 7 + 10 = \underline{\quad}$

Mental Maths


Monday

- $22 + 12 = 34$
- $18 - 9 = 9$
- Write one hundred and eighteen - **118**
- How many groups of 5? **2**

- Write the number before 119 - **118**
- 55, 60, 65, **70**
- Double 11 - **22**
- What is 15 more than 40? **55**
- Circle the largest
94, 49, 192, **291**
- $20 + 5 + 5 = 30$


Tuesday

- $19 + 11 = 30$
- $35 - 11 = 24$
- Write ninety four
94
- How many groups of 2? **2**

- Write the number after 256 - **257**
- 90, 100, 110, **120**
- Double 15 - **30**
- What is 15 more than 110? **125**
- Circle the largest
181, 811, 118, **818**
- $50 + 15 + 5 = 70$

Wednesday

- $24 + 9 = 33$
- $15 - 7 = 8$
- Write two hundred and eleven - **211**
- How many groups of 4? **1**

- Write the number before 99 - **98**
- 11, 13, 15, **17**
- Double 25 - **50**
- What is 15 more than 250? **265**
- Circle the largest
15, 51, **511**, 151
- $27 + 3 + 10 = 40$

Thursday

- $63 + 11 = 72$
- $43 - 12 = 31$
- Write eighty seven
87
- How many groups of 3? **2**

- Write the number after 312 - **313**
- 99, 97, 95, **93**
- Double 12 - **24**
- What is 15 more than 15? **30**
- Circle the largest
22, 222, 214, **221**
- $73 + 7 + 10 = 90$