

Mental Maths

Monday

1. $60 + 40 =$ _____

2. $30 - 11 =$ _____

3. Write one hundred & eighteen _____

4. How many groups of 4? _____



5. Write the number before 865 _____

6. 4, 8, 12, _____

7. Double 12 _____

8. What is 25 more than 20? _____

9. Circle the largest 22, 32, 12, 2

10. $50 + 50 + 50 =$ _____

Tuesday

1. $32 + 12 =$ _____

2. $86 - 16 =$ _____

3. Write two hundred & ninety five _____

4. How many groups of 2? _____



5. Write the number after 222 _____

6. 144, 140, 136, _____

7. Double 150 _____

8. What is 25 more than 25? _____

9. Circle the largest 91, 19, 9, 29

10. $4 + 14 + 12 =$ _____

Wednesday

1. $19 + 9 =$ _____

2. $90 - 20 =$ _____

3. Write thirty nine _____

4. How many groups of 3? _____



5. Write the number before 501 _____

6. 16, 19, 22, _____

7. Double 200 _____

8. What is 25 more than 50? _____

9. Circle the largest 63, 36, 33, 66

10. $25 + 25 + 7 =$ _____

Thursday

1. $65 + 15 =$ _____

2. $23 - 7 =$ _____

3. Write six hundred & thirty two _____

4. How many groups of 2? _____



5. Write the number after 899 _____

6. 5, 25, 45, _____

7. Double 300 _____


8. What is 25 more than 100? _____

9. Circle the largest 44, 43, 34, 22


10. $27 + 3 + 20 =$ _____

Mental Maths


Monday

- $60 + 40 = 100$
- $30 - 11 = 19$
- Write one hundred & eighteen - **118**
- How many groups of 4? **2**

- Write the number before 865 - **864**
- 4, 8, 12, **16**
- Double 12 - **24**
- What is 25 more than 20? **45**
- Circle the largest
22, **32**, 12, 2
- $50 + 50 + 50 = 150$


Tuesday

- $32 + 12 = 44$
- $86 - 16 = 70$
- Write two hundred & ninety five - **295**
- How many groups of 2? **6**

- Write the number after 222 - **223**
- 144, 140, 136, **132**
- Double 150 - **300**
- What is 25 more than 25? **50**
- Circle the largest
91, 19, 9, 29
- $4 + 14 + 12 = 30$

Wednesday

- $19 + 9 = 28$
- $90 - 20 = 70$
- Write thirty nine
39
- How many groups of 3? **2**

- Write the number before 501 - **500**
- 16, 19, 22, **25**
- Double 200 - **400**
- What is 25 more than 50? **75**
- Circle the largest
63, 36, 33, **66**
- $25 + 25 + 7 = 57$

Thursday

- $65 + 15 = 80$
- $23 - 7 = 16$
- Write six hundred & thirty two - **632**
- How many groups of 2? **4**

- Write the number after 899 - **900**
- 5, 25, 45, **65**
- Double 300 - **600**
- What is 25 more than 100? **125**
- Circle the largest
44, 43, 34, 22
- $27 + 3 + 20 = 50$