


# Addition





## Grade 1 Addition Worksheet

Find the sum.



1.  +  = \_\_\_\_\_

2.  +  = \_\_\_\_\_

3.  +  = \_\_\_\_\_

4.  +  = \_\_\_\_\_

5.  +  = \_\_\_\_\_

6.  +  = \_\_\_\_\_





Name: \_\_\_\_\_

# Addition



## Grade 1 Addition Worksheet

Find the sum.

1.  +  = 16

2.  +  = 14

3.  +  = 10

4.  +  = 9

5.  +  = 12

6.  +  = 13