

Mental Maths 3

Includes:

- 10 weeks of daily mental maths
- Answer sheets
- Variety of mathematical concepts

Mathematical concepts:

- Addition
- Subtraction
- Writing digits / words
- Place value
- Months
- Number patterns
- Conversions
- Estimating





Week 6 **Mental Maths**

Monday	Tuesday	Wednesday	Thursday
1. $14 + 10 =$ _____	1. $32 + 7 =$ _____	1. $41 + 9 =$ _____	1. $15 + 8 =$ _____
2. $22 - 6 =$ _____	2. $35 - 10 =$ _____	2. $26 - 9 =$ _____	2. $14 - 5 =$ _____
3. Write in words - 65	3. Write in words - 72	3. Write in words - 19	3. Write in words - 87
4. $16 + \underline{\quad} = 20$	4. $22 + \underline{\quad} = 30$	4. $26 + \underline{\quad} = 32$	4. $15 + \underline{\quad} = 25$
5. Days in a week?	5. Days in 2 weeks?	5. Days in 2 weeks?	5. Days in 4 weeks?

Week 1 **Mental Maths**

Monday	Tuesday	Wednesday	Thursday
1. $19 + 5 =$ _____	1. $26 + 10 =$ _____	1. $27 + 6 =$ _____	1. $34 + 6 =$ _____
2. $14 - 10 =$ _____	2. $25 - 5 =$ _____	2. $44 - 10 =$ _____	2. $43 - 5 =$ _____
3. Write eighty five	3. Write sixty two	3. Write forty three	3. Write seventy two
4. 5 th month of the year?	4. 8 th month of the year?	4. 12 th month of the year?	4. 9 th month of the year?

Week 7 **Mental Maths**

Monday	Tuesday	Wednesday	Thursday
1. $27 + 7 =$ _____	1. $25 + 10 =$ _____	1. $18 + 7 =$ _____	1. $8 + 6 =$ _____
2. $35 - 7 =$ _____	2. $39 - 9 =$ _____	2. $18 - 10 =$ _____	2. $21 - 10 =$ _____
3. Write in words - 58	3. Write in words - 36	3. Write in words - 21	3. Write in words - 98
4. $20 + \underline{\quad} = 30$	4. $32 + \underline{\quad} = 40$	4. $18 + \underline{\quad} = 26$	4. $11 + \underline{\quad} = 20$
5. 1 minute = ____ secs.	5. 2 minutes = ____ secs.	5. 3 minutes = ____ secs.	5. 4 minutes = ____ secs.
6. Name the shape?	6. Name the shape?	6. Name the shape?	6. Name the shape?
			
7. How many hundreds & tens in 740 hun. = ____ tens = ____	7. How many hundreds & tens in 660 hun. = ____ tens = ____	7. How many hundreds & tens in 850 hun. = ____ tens = ____	7. How many hundreds & tens in 430 hun. = ____ tens = ____
8. 4 hundreds + 8 tens = ____	8. 2 hundreds + 6 tens = ____	8. 3 hundreds + 5 tens = ____	8. 9 hundreds + 9 tens = ____
9. $4 + 16 + 10 =$ _____	9. $20 + 5 + 6 =$ _____	9. $13 + 7 + 6 =$ _____	9. $8 + 6 + 6 =$ _____
10. Which is heavier? Car or Truck	10. Which is lighter? Plate or Tissue	10. Which is heavier? T.V. or Kitten	10. Which is lighter? Puppy or Tiger

Week 1

Mental Maths

Monday

1. $19 + 5 =$ _____

2. $14 - 10 =$ _____

3. Write eighty five

4. 5th month of the
year? _____

5. 8 more than 17 =

6. 7 less than 27 =

7. How many tens &
ones in 65
tens = _____ ones = _____

8. 4 tens + 6 ones
= _____

9. $5 + 5 + 10 =$ _____

10. 8, 10, 12, _____

Tuesday

1. $26 + 10 =$ _____

2. $25 - 5 =$ _____

3. Write sixty two

4. 8th month of the
year? _____

5. 10 more than 40 =

6. 10 less than 32 =

7. How many tens &
ones in 33
tens = _____ ones = _____

8. 9 tens + 2 ones
= _____

9. $10 + 10 + 10 =$ _____

10. 12, 13, 14, _____

Wednesday

1. $27 + 6 =$ _____

2. $44 - 10 =$ _____

3. Write forty three

4. 12th month of the
year? _____

5. 6 more than 12 =

6. 4 less than 41 =

7. How many tens &
ones in 49
tens = _____ ones = _____

8. 3 tens + 5 ones
= _____

9. $6 + 4 + 7 =$ _____

10. 20, 19, 18, _____

Thursday

1. $34 + 6 =$ _____

2. $43 - 5 =$ _____

3. Write seventy two

4. 9th month of the
year? _____

5. 11 more than 20 =

6. 9 less than 16 =

7. How many tens &
ones in 53
tens = _____ ones = _____

8. 7 tens + 6 ones
= _____

9. $17 + 3 + 8 =$ _____

10. 2, 4, 6, _____

Preview

Mental Maths

Monday

- $35 + 7 = \underline{\quad}$
- $25 - 10 = \underline{\quad}$
- Write seventy five
 $\underline{\quad}$
- 4th month of the year? $\underline{\quad}$
- 10 more than 31 =
 $\underline{\quad}$
- 8 less than 35 =
 $\underline{\quad}$
- How many tens & ones in 72
tens = $\underline{\quad}$ ones = $\underline{\quad}$
- 5 tens + 3 ones =
 $\underline{\quad}$
- $16 + 5 + 4 = \underline{\quad}$
- 5, 10, 15, $\underline{\quad}$

Tuesday

- $16 + 6 = \underline{\quad}$
- $36 - 7 = \underline{\quad}$
- Write ninety three
 $\underline{\quad}$
- 7th month of the year? $\underline{\quad}$
- 8 more than 20 =
 $\underline{\quad}$
- 7 less than 10 =
 $\underline{\quad}$
- How many tens & ones in 99
tens = $\underline{\quad}$ ones = $\underline{\quad}$
- 3 tens + 7 ones =
 $\underline{\quad}$
- $20 + 8 + 3 = \underline{\quad}$
- 10, 20, 30, $\underline{\quad}$

Wednesday

- $29 + 10 = \underline{\quad}$
- $33 - 6 = \underline{\quad}$
- Write sixty one
 $\underline{\quad}$
- 11th month of the year? $\underline{\quad}$
- 7 more than 19 =
 $\underline{\quad}$
- 5 less than 43 =
 $\underline{\quad}$
- How many tens & ones in 86
tens = $\underline{\quad}$ ones = $\underline{\quad}$
- 4 tens + 4 ones =
 $\underline{\quad}$
- $4 + 4 + 4 = \underline{\quad}$
- 7, 6, 5, $\underline{\quad}$

Thursday

- $14 + 7 = \underline{\quad}$
- $18 - 10 = \underline{\quad}$
- Write ninety nine
 $\underline{\quad}$
- 2nd month of the year? $\underline{\quad}$
- 6 more than 25 =
 $\underline{\quad}$
- 10 less than 25 =
 $\underline{\quad}$
- How many tens & ones in 47
tens = $\underline{\quad}$ ones = $\underline{\quad}$
- 9 tens + 5 ones =
 $\underline{\quad}$
- $29 + 10 + 2 = \underline{\quad}$
- 31, 30, 29, $\underline{\quad}$

Preview

Mental Maths

Monday

- $21 + 9 = \underline{\quad}$
- $36 - 8 = \underline{\quad}$
- Write twenty nine
 $\underline{\quad}$
- 10th month of the year? $\underline{\quad}$
- 6 more than 45 =
 $\underline{\quad}$
- 9 less than 20 =
 $\underline{\quad}$
- How many tens & ones in 45
tens = $\underline{\quad}$ ones = $\underline{\quad}$
- 9 tens + 2 ones =
 $\underline{\quad}$
- $25 + 5 + 5 = \underline{\quad}$
- 9, 7, 5, $\underline{\quad}$

Tuesday

- $6 + 8 = \underline{\quad}$
- $24 - 10 = \underline{\quad}$
- Write seventy three
 $\underline{\quad}$
- 6th month of the year? $\underline{\quad}$
- 7 more than 4 =
 $\underline{\quad}$
- 4 less than 30 =
 $\underline{\quad}$
- How many tens & ones in 82
tens = $\underline{\quad}$ ones = $\underline{\quad}$
- 4 tens + 6 ones =
 $\underline{\quad}$
- $15 + 10 + 5 = \underline{\quad}$
- 24, 25, 26, $\underline{\quad}$

Wednesday

- $14 + 9 = \underline{\quad}$
- $27 - 5 = \underline{\quad}$
- Write eighty two
 $\underline{\quad}$
- 5th month of the year? $\underline{\quad}$
- 3 more than 18 =
 $\underline{\quad}$
- 7 less than 56 =
 $\underline{\quad}$
- How many tens & ones in 94
tens = $\underline{\quad}$ ones = $\underline{\quad}$
- 5 tens + 8 ones =
 $\underline{\quad}$
- $11 + 9 + 6 = \underline{\quad}$
- 12, 14, 16, $\underline{\quad}$

Thursday

- $35 + 4 = \underline{\quad}$
- $41 - 11 = \underline{\quad}$
- Write fifty four
 $\underline{\quad}$
- 1st month of the year? $\underline{\quad}$
- 8 more than 32 =
 $\underline{\quad}$
- 8 less than 10 =
 $\underline{\quad}$
- How many tens & ones in 21
tens = $\underline{\quad}$ ones = $\underline{\quad}$
- 8 tens + 4 ones =
 $\underline{\quad}$
- $4 + 5 + 6 = \underline{\quad}$
- 50, 49, 48, $\underline{\quad}$

Preview

Mental Maths

Monday

- $12 + 9 = \underline{\quad}$
- $45 - 5 = \underline{\quad}$
- Write ninety seven
 $\underline{\quad}$
- 9th month of the year? $\underline{\quad}$
- 10 more than 22 =
 $\underline{\quad}$
- 10 less than 42 =
 $\underline{\quad}$
- How many tens & ones in 66
tens = $\underline{\quad}$ ones = $\underline{\quad}$
- 4 tens + 9 ones =
 $\underline{\quad}$
- $8 + 2 + 2 = \underline{\quad}$
- 22, 23, 24, $\underline{\quad}$

Tuesday

- $17 + 7 = \underline{\quad}$
- $16 - 5 = \underline{\quad}$
- Write sixty two
 $\underline{\quad}$
- 4th month of the year? $\underline{\quad}$
- 8 more than 19 =
 $\underline{\quad}$
- 7 less than 26 =
 $\underline{\quad}$
- How many tens & ones in 88
tens = $\underline{\quad}$ ones = $\underline{\quad}$
- 3 tens + 7 ones =
 $\underline{\quad}$
- $3 + 3 + 3 = \underline{\quad}$
- 44, 43, 42, $\underline{\quad}$

Wednesday

- $23 + 6 = \underline{\quad}$
- $19 - 10 = \underline{\quad}$
- Write forty one
 $\underline{\quad}$
- 3rd month of the year? $\underline{\quad}$
- 4 more than 4
 $\underline{\quad}$
- 4 less than 52 =
 $\underline{\quad}$
- How many tens & ones in 77
tens = $\underline{\quad}$ ones = $\underline{\quad}$
- 6 tens + 2 ones =
 $\underline{\quad}$
- $4 + 12 + 4 = \underline{\quad}$
- 10, 15, 20, $\underline{\quad}$

Thursday

- $28 + 3 = \underline{\quad}$
- $35 - 7 = \underline{\quad}$
- Write thirty eight
 $\underline{\quad}$
- 2nd month of the year? $\underline{\quad}$
- 10 more than 7 =
 $\underline{\quad}$
- 9 less than 19 =
 $\underline{\quad}$
- How many tens & ones in 22
tens = $\underline{\quad}$ ones = $\underline{\quad}$
- 7 tens + 5 ones =
 $\underline{\quad}$
- $3 + 34 + 3 = \underline{\quad}$
- 12, 15, 18, $\underline{\quad}$

Preview

Mental Maths

Monday

- $8 + 8 = \underline{\quad}$
- $16 - 8 = \underline{\quad}$
- Write eighty four
 $\underline{\quad}$
- 11th month of the year? $\underline{\quad}$
- 7 more than 39 =
 $\underline{\quad}$
- 9 less than 25 =
 $\underline{\quad}$
- How many tens & ones in 63
tens = $\underline{\quad}$ ones = $\underline{\quad}$
- 8 tens + 2 ones =
 $\underline{\quad}$
- $6 + 6 + 6 = \underline{\quad}$
- 30, 32, 34, $\underline{\quad}$

Tuesday

- $35 + 8 = \underline{\quad}$
- $25 - 9 = \underline{\quad}$
- Write seventy three
 $\underline{\quad}$
- 5th month of the year? $\underline{\quad}$
- 4 more than 9 =
 $\underline{\quad}$
- 10 less than 39 =
 $\underline{\quad}$
- How many tens & ones in 49
tens = $\underline{\quad}$ ones = $\underline{\quad}$
- 6 tens + 8 ones =
 $\underline{\quad}$
- $28 + 10 + 2 = \underline{\quad}$
- 15, 14, 13, $\underline{\quad}$

Wednesday

- $41 + 9 = \underline{\quad}$
- $14 - 8 = \underline{\quad}$
- Write twenty nine
 $\underline{\quad}$
- 9th month of the year? $\underline{\quad}$
- 7 more than 36 =
 $\underline{\quad}$
- 7 less than 44 =
 $\underline{\quad}$
- How many tens & ones in 91
tens = $\underline{\quad}$ ones = $\underline{\quad}$
- 7 tens + 9 ones =
 $\underline{\quad}$
- $13 + 7 + 5 = \underline{\quad}$
- 20, 25, 30, $\underline{\quad}$

Thursday

- $32 + 10 = \underline{\quad}$
- $22 - 9 = \underline{\quad}$
- Write ninety six
 $\underline{\quad}$
- 8th month of the year? $\underline{\quad}$
- 10 more than 30 =
 $\underline{\quad}$
- 5 less than 51 =
 $\underline{\quad}$
- How many tens & ones in 34
tens = $\underline{\quad}$ ones = $\underline{\quad}$
- 5 tens + 3 ones =
 $\underline{\quad}$
- $12 + 8 + 10 = \underline{\quad}$
- 40, 50, 60, $\underline{\quad}$

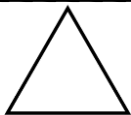
Preview

Mental Maths

Monday

- $14 + 10 = \underline{\quad}$
- $22 - 6 = \underline{\quad}$
- Write in words - 65

- $16 + \underline{\quad} = 20$
- Days in a week? $\underline{\quad}$
- Name the shape?



- How many hundreds & tens in 560
hun. = $\underline{\quad}$ tens = $\underline{\quad}$
- 5 hundreds + 4 tens = $\underline{\quad}$
- $5 + 5 + 5 = \underline{\quad}$
- Which is heavier?
Pencil or Book

Tuesday

- $32 + 7 = \underline{\quad}$
- $35 - 10 = \underline{\quad}$
- Write in words - 72

- $22 + \underline{\quad} = 30$
- Days in 3 weeks? $\underline{\quad}$
- Name the shape?



- How many hundreds & tens in 480
hun. = $\underline{\quad}$ tens = $\underline{\quad}$
- 3 hundreds + 9 tens = $\underline{\quad}$
- $3 + 10 + 7 = \underline{\quad}$
- Which is lighter?
Teddy or Chair

Wednesday

- $41 + 9 = \underline{\quad}$
- $26 - 9 = \underline{\quad}$
- Write in words - 19

- $26 + \underline{\quad} = 32$
- Days in 2 weeks? $\underline{\quad}$
- Name the shape?



- How many hundreds & tens in 210
hun. = $\underline{\quad}$ tens = $\underline{\quad}$
- 2 hundreds + 7 tens = $\underline{\quad}$
- $8 + 2 + 5 = \underline{\quad}$
- Which is heavier?
House or Pizza

Thursday

- $15 + 8 = \underline{\quad}$
- $14 - 5 = \underline{\quad}$
- Write in words - 87

- $15 + \underline{\quad} = 25$
- Days in 4 weeks? $\underline{\quad}$
- Name the shape?



- How many hundreds & tens in 930
hun. = $\underline{\quad}$ tens = $\underline{\quad}$
- 4 hundreds + 4 tens = $\underline{\quad}$
- $7 + 4 + 9 = \underline{\quad}$
- Which is lighter?
Table or Paper

Preview

Mental Maths

Monday

- $27 + 7 = \underline{\quad}$
- $35 - 7 = \underline{\quad}$
- Write in words - 58

- $20 + \underline{\quad} = 30$
- 1 minute = $\underline{\quad}$ secs.
- Name the shape?



- How many hundreds & tens in 740
hun. = $\underline{\quad}$ tens = $\underline{\quad}$
- 4 hundreds + 8 tens = $\underline{\quad}$
- $4 + 16 + 10 = \underline{\quad}$
- Which is heavier?
Car or Truck

Tuesday

- $25 + 10 = \underline{\quad}$
- $39 - 9 = \underline{\quad}$
- Write in words - 36

- $32 + \underline{\quad} = 40$
- 2 minutes = $\underline{\quad}$ secs.
- Name the shape?



- How many hundreds & tens in 660
hun. = $\underline{\quad}$ tens = $\underline{\quad}$
- 2 hundreds + 6 tens = $\underline{\quad}$
- $20 + 5 + 6 = \underline{\quad}$
- Which is lighter?
Plate or Tissue

Wednesday

- $18 + 7 = \underline{\quad}$
- $18 - 10 = \underline{\quad}$
- Write in words - 21

- $18 + \underline{\quad} = 26$
- 3 minutes = $\underline{\quad}$ secs.
- Name the shape?



- How many hundreds & tens in 850
hun. = $\underline{\quad}$ tens = $\underline{\quad}$
- 3 hundreds + 5 tens = $\underline{\quad}$
- $13 + 7 + 6 = \underline{\quad}$
- Which is heavier?
T.V. or Kitten

Thursday

- $8 + 6 = \underline{\quad}$
- $21 - 10 = \underline{\quad}$
- Write in words - 98

- $11 + \underline{\quad} = 20$
- 4 minutes = $\underline{\quad}$ secs.
- Name the shape?



- How many hundreds & tens in 430
hun. = $\underline{\quad}$ tens = $\underline{\quad}$
- 9 hundreds + 9 tens = $\underline{\quad}$
- $8 + 6 + 6 = \underline{\quad}$
- Which is lighter?
Puppy or Tiger

Preview

Mental Maths

Monday

- $39 + 6 = \underline{\quad}$
- $28 - 8 = \underline{\quad}$
- Write in words - 72

- $12 + \underline{\quad} = 19$
- 1 hour = mins.
- Name the shape?

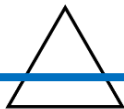


- How many hundreds & tens in 550
hun. = tens =
- 1 hundreds + 6 tens =
- $18 + 3 + 2 = \underline{\quad}$
- Which is heavier?
Tree or Leaf

Tuesday

- $13 + 7 = \underline{\quad}$
- $44 - 10 = \underline{\quad}$
- Write in words - 44

- $5 + \underline{\quad} = 11$
- 2 hours = mins.
- Name the shape?



- How many hundreds & tens in 290
hun. = tens =
- 9 hundreds + 4 tens =
- $26 + 7 + 4 = \underline{\quad}$
- Which is lighter?
Bicycle or Shoe

Wednesday

- $24 + 8 = \underline{\quad}$
- $37 - 5 = \underline{\quad}$
- Write in words - 89

- $9 + \underline{\quad} = 18$
- 3 hours = mins.
- Name the shape?

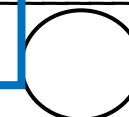


- How many hundreds & tens in 780
hun. = tens =
- 5 hundreds + 8 tens =
- $12 + 5 + 5 = \underline{\quad}$
- Which is heavier?
Pig or Elephant

Thursday

- $19 + 7 = \underline{\quad}$
- $13 - 11 = \underline{\quad}$
- Write in words - 63

- $13 + \underline{\quad} = 22$
- 4 hours = mins.
- Name the shape?



- How many hundreds & tens in 140
hun. = tens =
- 3 hundreds + 2 tens =
- $7 + 4 + 3 = \underline{\quad}$
- Which is lighter?
Fish or Whale

Preview

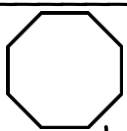
Mental Maths

Monday

- $40 + 10 = \underline{\quad}$
- $34 - 6 = \underline{\quad}$
- Write in words - 85

- $15 + \underline{\quad} = 25$
- Days in 2 weeks?

- Name the shape?



- How many hundreds & tens in 240
hun. = $\underline{\quad}$ tens = $\underline{\quad}$
- 8 hundreds + 5 tens = $\underline{\quad}$
- $25 + 5 + 5 = \underline{\quad}$
- Which is heavier?
Phone or Bus

Tuesday

- $9 + 9 = \underline{\quad}$
- $18 - 8 = \underline{\quad}$
- Write in words - 13

- $9 + \underline{\quad} = 18$
- Days in 1 week?

- Name the shape?



- How many hundreds & tens in 390
hun. = $\underline{\quad}$ tens = $\underline{\quad}$
- 2 hundreds + 3 tens = $\underline{\quad}$
- $11 + 9 + 10 = \underline{\quad}$
- Which is lighter?
Dog or Lion

Wednesday

- $18 + 7 = \underline{\quad}$
- $12 - 9 = \underline{\quad}$
- Write in words - 26

- $10 + \underline{\quad} = 20$
- Days in 3 weeks?

- Name the shape?



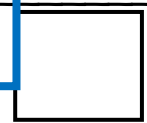
- How many hundreds & tens in 940
hun. = $\underline{\quad}$ tens = $\underline{\quad}$
- 7 hundreds + 4 tens = $\underline{\quad}$
- $4 + 4 + 4 = \underline{\quad}$
- Which is heavier?
T-Shirt or Rock

Thursday

- $22 + 8 = \underline{\quad}$
- $37 - 7 = \underline{\quad}$
- Write in words - 41

- $26 + \underline{\quad} = 30$
- Days in 4 weeks?

- Name the shape?



- How many hundreds & tens in 770
hun. = $\underline{\quad}$ tens = $\underline{\quad}$
- 2 hundreds + 5 tens = $\underline{\quad}$
- $3 + 7 + 10 = \underline{\quad}$
- Which is lighter?
Computer or Pen

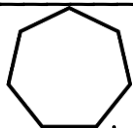
Preview

Mental Maths

Monday

- $33 + 8 = \underline{\quad}$
- $18 - 9 = \underline{\quad}$
- Write in words - 67

- $20 + \underline{\quad} = 31$
- 3 hours = mins.
- Name the shape?



- How many hundreds & tens in 580
hun. = tens =
- 9 hundreds + 9 tens =
- $6 + 10 + 10 = \underline{\quad}$
- Which is heavier?
Pants or Pen

Tuesday

- $14 + 5 = \underline{\quad}$
- $38 - 10 = \underline{\quad}$
- Write in words - 22

- $8 + \underline{\quad} = 15$
- 1 hour = mins.
- Name the shape?

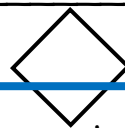


- How many hundreds & tens in 260
hun. = tens =
- 1 hundred + 5 tens =
- $5 + 5 + 9 = \underline{\quad}$
- Which is lighter?
Monkey or Gorilla

Wednesday

- $24 + 6 = \underline{\quad}$
- $27 - 8 = \underline{\quad}$
- Write in words - 81

- $6 + \underline{\quad} = 12$
- 2 hours = mins.
- Name the shape?

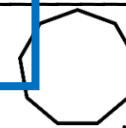


- How many hundreds & tens in 640
hun. = tens =
- 6 hundreds + 8 tens =
- $17 + 3 + 10 = \underline{\quad}$
- Which is heavier?
Bird or Shark

Thursday

- $44 + 5 = \underline{\quad}$
- $16 - 9 = \underline{\quad}$
- Write in words - 56

- $7 + \underline{\quad} = 14$
- 4 hours = mins.
- Name the shape?



- How many hundreds & tens in 170
hun. = tens =
- 4 hundreds + 6 tens =
- $32 + 3 + 5 = \underline{\quad}$
- Which is lighter?
Brick or Paper

Preview

Week 1

Mental Maths

Monday

- $19 + 5 = 24$
- $14 - 10 = 4$
- Write eighty five
85
- 5th month of the year? May
- 8 more than 17 =
25
- 7 less than 27 =
20
- How many tens & ones in 65
tens = 6 ones = 5
- 4 tens + 6 ones = 46
- $5 + 5 + 10 = 20$
- 8, 10, 12, 14

Tuesday

- $26 + 10 = 36$
- $25 - 5 = 20$
- Write sixty two
62
- 8th month of the year? August
- 10 more than 40 =
50
- 10 less than 32 =
22
- How many tens & ones in 33
tens = 3 ones = 3
- 9 tens + 2 ones = 92
- $10 + 10 + 10 = 30$
- 12, 13, 14, 15

Wednesday

- $27 + 6 = 33$
- $44 - 10 = 34$
- Write forty three
43
- 12th month of the year? December
- 6 more than 27 =
33
- 4 less than 41 =
37
- How many tens & ones in 49
tens = 4 ones = 9
- 3 tens + 5 ones = 35
- $6 + 4 + 7 = 17$
- 20, 19, 18, 17

Thursday

- $34 + 6 = 40$
- $43 - 5 = 38$
- Write seventy two
72
- 9th month of the year? September
- 11 more than 20 =
31
- 9 less than 16 =
7
- How many tens & ones in 53
tens = 5 ones = 3
- 7 tens + 6 ones = 76
- $17 + 3 + 8 = 28$
- 2, 4, 6, 8

Preview

Mental Maths

Monday

- $35 + 7 = 42$
- $25 - 10 = 15$
- Write seventy five
75
- 4th month of the year? April
- 10 more than 31 =
41
- 8 less than 35 =
27
- How many tens & ones in 72
tens = 7 ones = 2
- 5 tens + 3 ones
= 53
- $16 + 5 + 4 = 25$
- 5, 10, 15, 20

Tuesday

- $16 + 6 = 22$
- $36 - 7 = 29$
- Write ninety three
93
- 7th month of the year? July
- 8 more than 20 =
28
- 7 less than 10 =
3
- How many tens & ones in 99
tens = 9 ones = 9
- 3 tens + 7 ones
= 37
- $20 + 8 + 3 = 31$
- 10, 20, 30, 40

Wednesday

- $29 + 10 = 39$
- $33 - 6 = 27$
- Write sixty one
61
- 11th month of the year? November
- 7 more than 19 =
26
- 5 less than 43 =
38
- How many tens & ones in 86
tens = 8 ones = 6
- 4 tens + 4 ones
= 44
- $4 + 4 + 4 = 12$
- 7, 6, 5, 4

Thursday

- $14 + 7 = 21$
- $18 - 10 = 8$
- Write ninety nine
99
- 2nd month of the year? February
- 6 more than 25 =
31
- 10 less than 25 =
15
- How many tens & ones in 47
tens = 4 ones = 7
- 9 tens + 5 ones
= 95
- $29 + 10 + 2 = 41$
- 31, 30, 29, 28

Preview

Mental Maths

Monday

- $21 + 9 = 30$
- $36 - 8 = 28$
- Write twenty nine
29
- 10th month of the year? October
- 6 more than 45 =
51
- 9 less than 20 =
11
- How many tens & ones in 45
tens = 4 ones = 5
- 9 tens + 2 ones
= 92
- $25 + 5 + 5 = 35$
- 9, 7, 5, 3

Tuesday

- $6 + 8 = 14$
- $24 - 10 = 14$
- Write seventy three
73
- 6th month of the year? June
- 7 more than 42 =
49
- 4 less than 30 =
26
- How many tens & ones in 82
tens = 8 ones = 2
- 4 tens + 6 ones
= 46
- $15 + 10 + 5 = 30$
- 24, 25, 26, 27

Wednesday

- $14 + 9 = 23$
- $27 - 5 = 22$
- Write eighty two
82
- 5th month of the year? May
- 3 more than 18 =
21
- 7 less than 56 =
49
- How many tens & ones in 94
tens = 9 ones = 4
- 5 tens + 8 ones
= 58
- $11 + 9 + 6 = 26$
- 12, 14, 16, 18

Thursday

- $35 + 4 = 39$
- $41 - 11 = 30$
- Write fifty four
54
- 1st month of the year? January
- 8 more than 32 =
40
- 8 less than 10 =
2
- How many tens & ones in 21
tens = 2 ones = 1
- 8 tens + 4 ones
= 84
- $4 + 5 + 6 = 15$
- 50, 49, 48, 47

Preview

Mental Maths

Monday

- $12 + 9 = 21$
- $45 - 5 = 40$
- Write ninety seven
97
- 9th month of the year? September
- 10 more than 22 =
32
- 10 less than 42 =
32
- How many tens & ones in 66
tens = 6 ones = 6
- 4 tens + 9 ones
= 49
- $8 + 2 + 2 = 12$
- 22, 23, 24, 25

Tuesday

- $17 + 7 = 24$
- $16 - 5 = 11$
- Write sixty two
62
- 4th month of the year? April
- 8 more than 19 =
27
- 7 less than 26 =
19
- How many tens & ones in 88
tens = 8 ones = 8
- 3 tens + 7 ones
= 37
- $3 + 3 + 3 = 9$
- 44, 43, 42, 41

Wednesday

- $23 + 6 = 29$
- $19 - 10 = 9$
- Write forty one
41
- 3rd month of the year? March
- 4 more than 44
48
- 4 less than 52 =
48
- How many tens & ones in 77
tens = 7 ones = 7
- 6 tens + 2 ones
= 62
- $4 + 12 + 4 = 20$
- 10, 15, 20, 25

Thursday

- $28 + 3 = 31$
- $35 - 7 = 28$
- Write thirty eight
38
- 2nd month of the year? February
- 10 more than 7 =
17
- 9 less than 19 =
10
- How many tens & ones in 22
tens = 2 ones = 2
- 7 tens + 5 ones
= 75
- $3 + 34 + 3 = 40$
- 12, 15, 18, 21

Preview

Mental Maths

Monday

- $8 + 8 = 16$
- $16 - 8 = 8$
- Write eighty four
84
- 11th month of the year? November
- 7 more than 39 =
46
- 9 less than 25 =
16
- How many tens & ones in 63
tens = 6 ones = 3
- 8 tens + 2 ones = 82
- $6 + 6 + 6 = 18$
- 30, 32, 34, 36

Tuesday

- $35 + 8 = 43$
- $25 - 9 = 16$
- Write seventy three
73
- 5th month of the year? May
- 4 more than 9 = 13
- 10 less than 39 =
29
- How many tens & ones in 49
tens = 4 ones = 9
- 6 tens + 8 ones = 68
- $28 + 10 + 2 = 40$
- 15, 14, 13, 12

Wednesday

- $41 + 9 = 50$
- $14 - 8 = 6$
- Write twenty nine
29
- 9th month of the year? September
- 7 more than 36 =
43
- 7 less than 44 =
37
- How many tens & ones in 91
tens = 9 ones = 1
- 7 tens + 9 ones = 79
- $13 + 7 + 5 = 25$
- 20, 25, 30, 35

Thursday

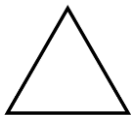
- $32 + 10 = 42$
- $22 - 9 = 13$
- Write ninety six
96
- 8th month of the year? August
- 10 more than 30 =
40
- 5 less than 51 =
46
- How many tens & ones in 34
tens = 3 ones = 4
- 5 tens + 3 ones = 53
- $12 + 8 + 10 = 30$
- 40, 50, 60, 70

Preview

Mental Maths

Monday

- $14 + 10 = 24$
- $22 - 6 = 16$
- Write in words - 65
sixty five
- $16 + 4 = 20$
- Days in a week? 7
- Name the shape?
triangle



- How many hundreds & tens in 560
hun. = 5 tens = 6
- 5 hundreds + 4 tens = 540
- $5 + 5 + 5 = 15$
- Which is heavier?
Pencil or **Book**

Tuesday

- $32 + 7 = 39$
- $35 - 10 = 25$
- Write in words - 72
seventy two
- $22 + 8 = 30$
- Days in 3 weeks? 21
- Name the shape?
Octagon



- How many hundreds & tens in 480
hun. = 4 tens = 8
- 3 hundreds + 9 tens = 390
- $3 + 10 + 7 = 20$
- Which is lighter?
Teddy or Chair

Wednesday

- $41 + 9 = 50$
- $26 - 9 = 17$
- Write in words - 19
nineteen
- $26 + 6 = 32$
- Days in 2 weeks? 14
- Name the shape?
Pentagon



- How many hundreds & tens in 210
hun. = 2 tens = 1
- 2 hundreds + 7 tens = 270
- $8 + 2 + 5 = 15$
- Which is heavier?
House or Pizza

Thursday

- $15 + 8 = 23$
- $14 - 5 = 9$
- Write in words - 87
eighty seven
- $15 + 10 = 25$
- Days in 4 weeks? 28
- Name the shape?
Oval



- How many hundreds & tens in 930
hun. = 9 tens = 3
- 4 hundreds + 4 tens = 440
- $7 + 4 + 9 = 22$
- Which is lighter?
Table or **Paper**

Preview

Mental Maths

Monday

- $27 + 7 = 34$
- $35 - 7 = 28$
- Write in words - 58
fifty eight
- $20 + 10 = 30$
- 1 minute = 60 secs.
- Name the shape?
square



- How many hundreds & tens in 740
hun. = 7 tens = 4
- 4 hundreds + 8 tens
= 480
- $4 + 16 + 10 = 30$
- Which is heavier?
Car or **Truck**

Tuesday

- $25 + 10 = 35$
- $39 - 9 = 30$
- Write in words - 36
thirty six
- $32 + 8 = 40$
- 2 minutes = 120 secs.
- Name the shape?
diamond



- How many hundreds & tens in 660
hun. = 6 tens = 6
- 2 hundreds + 6 tens
= 260
- $20 + 5 + 6 = 31$
- Which is lighter?
Plate or **Tissue**

Wednesday

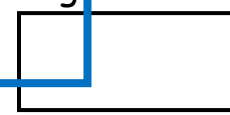
- $18 + 7 = 25$
- $18 - 10 = 8$
- Write in words - 21
twenty one
- $18 + 8 = 26$
- 3 minutes = 180 secs.
- Name the shape?
heptagon



- How many hundreds & tens in 850
hun. = 8 tens = 5
- 3 hundreds + 5 tens
= 350
- $13 + 7 + 6 = 26$
- Which is heavier?
T.V. or Kitten

Thursday

- $8 + 6 = 14$
- $21 - 10 = 11$
- Write in words - 98
ninety eight
- $11 + 9 = 20$
- 4 minutes = 240 secs.
- Name the shape?
rectangle



- How many hundreds & tens in 430
hun. = 4 tens = 3
- 9 hundreds + 9 tens
= 990
- $8 + 6 + 6 = 20$
- Which is lighter?
Puppy or Tiger

Preview

Mental Maths

Monday

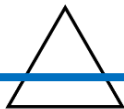
- $39 + 6 = 45$
- $28 - 8 = 20$
- Write in words - 72
seventy two
- $12 + 7 = 19$
- 1 hour = 60 mins.
- Name the shape?
hexagon



- How many hundreds & tens in 550
hun. = 5 tens = 5
- 1 hundreds + 6 tens
= 160
- $18 + 3 + 2 = 23$
- Which is heavier?
Tree or Leaf

Tuesday

- $13 + 7 = 20$
- $44 - 10 = 34$
- Write in words - 44
forty four
- $5 + 6 = 11$
- 2 hours = 120 mins.
- Name the shape?
triangle



- How many hundreds & tens in 290
hun. = 2 tens = 90
- 9 hundreds + 4 tens
= 940
- $26 + 7 + 4 = 37$
- Which is lighter?
Bicycle or **Shoe**

Wednesday

- $24 + 8 = 32$
- $37 - 5 = 32$
- Write in words - 89
eighty nine
- $9 + 9 = 18$
- 3 hours = 180 mins.
- Name the shape?
heptagon



- How many hundreds & tens in 780
hun. = 7 tens = 8
- 5 hundreds + 8 tens
= 580
- $12 + 5 + 5 = 22$
- Which is heavier?
Pig or **Elephant**

Thursday

- $19 + 7 = 16$
- $13 - 11 = 2$
- Write in words - 63
sixty three
- $13 + 9 = 22$
- 4 hours = 240 mins.
- Name the shape?
circle



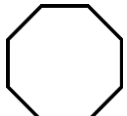
- How many hundreds & tens in 140
hun. = 1 tens = 4
- 3 hundreds + 2 tens
= 320
- $7 + 4 + 3 = 14$
- Which is lighter?
Fish or Whale

Preview

Mental Maths

Monday

- $40 + 10 = 50$
- $34 - 6 = 28$
- Write in words - 85
eighty five
- $15 + 10 = 25$
- Days in 2 weeks? 14
- Name the shape?
octagon



- How many hundreds & tens in 240
hun. = 2 tens = 4
- 8 hundreds + 5 tens = 850
- $25 + 5 + 5 = 35$
- Which is heavier?
Phone or **Bus**

Tuesday

- $9 + 9 = 18$
- $18 - 8 = 10$
- Write in words - 13
thirteen
- $9 + 9 = 18$
- Days in 1 week? 7
- Name the shape?
oval



- How many hundreds & tens in 390
hun. = 3 tens = 9
- 2 hundreds + 3 tens = 230
- $11 + 9 + 10 = 30$
- Which is lighter?
Dog or Lion

Wednesday

- $18 + 7 = 25$
- $12 - 9 = 3$
- Write in words - 26
twenty six
- $10 + 10 = 20$
- Days in 3 weeks? 21
- Name the shape?
pentagon



- How many hundreds & tens in 940
hun. = 9 tens = 4
- 7 hundreds + 4 tens = 740
- $4 + 4 + 4 = 12$
- Which is heavier?
T-Shirt or **Rock**

Thursday

- $22 + 8 = 30$
- $37 - 7 = 30$
- Write in words - 41
forty one
- $26 + 4 = 30$
- Days in 4 weeks? 28
- Name the shape?
square



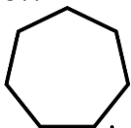
- How many hundreds & tens in 770
hun. = 7 tens = 7
- 2 hundreds + 5 tens = 250
- $3 + 7 + 10 = 20$
- Which is lighter?
Computer or **Pen**

Preview

Mental Maths

Monday

- $33 + 8 = 41$
- $18 - 9 = 9$
- Write in words - 67
sixty seven
- $20 + 11 = 31$
- 3 hours = 180 mins.
- Name the shape?
heptagon



- How many hundreds & tens in 580
hun. = 5 tens = 8
- 9 hundreds + 9 tens
= 990
- $6 + 10 + 10 = 26$
- Which is heavier?
Pants or Pen

Tuesday

- $14 + 5 = 19$
- $38 - 10 = 28$
- Write in words - 22
twenty two
- $8 + 7 = 15$
- 1 hour = 60 mins.
- Name the shape?
hexagon



- How many hundreds & tens in 260
hun. = 2 tens = 6
- 1 hundred + 5 tens
= 150
- $5 + 5 + 9 = 19$
- Which is lighter?
Monkey or Gorilla

Wednesday

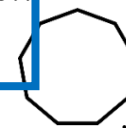
- $24 + 6 = 30$
- $27 - 8 = 19$
- Write in words - 81
eighty one
- $6 + 6 = 12$
- 2 hours = 120 mins.
- Name the shape?
diamond



- How many hundreds & tens in 640
hun. = 6 tens = 4
- 6 hundreds + 8 tens
= 680
- $17 + 3 + 10 = 30$
- Which is heavier?
Bird or **Shark**

Thursday

- $44 + 5 = 49$
- $16 - 9 = 7$
- Write in words - 56
fifty six
- $7 + 7 = 14$
- 4 hours = 240mins.
- Name the shape?
nonagon



- How many hundreds & tens in 170
hun. = 1 tens = 7
- 4 hundreds + 6 tens
= 460
- $32 + 3 + 5 = 40$
- Which is lighter?
Brick or **Paper**

Preview