

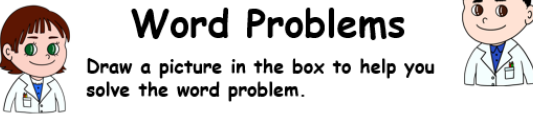
Word Problems

Grade 2

Name: _____

Word Problems

Draw a picture in the box to help you solve the word problem.



There were 14 street cats in the morning and 22 more came in the afternoon. How many street cats were there altogether?

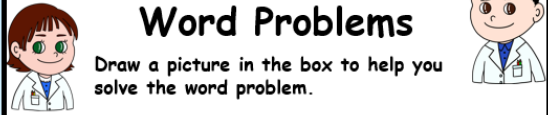


Answer: _____

Name: _____

Word Problems

Draw a picture in the box to help you solve the word problem.



Jack bought 3 toys. The toy truck was \$23, the toy car was \$7 and the toy tractor was \$12. How much did he pay?



Name: _____

Word Problems

Draw a picture in the box to help you solve the word problem.



Joanna loves to read. She bought 8 books in April, 11 books in May and 20 books in April. How many books did she have altogether?



Name: _____

Word Problems

Draw a picture in the box to help you solve the word problem.



Simon and Peter played soccer for 20 minutes in the morning, 20 minutes in the afternoon and 20 minutes at night. How long did they play altogether?



Answer: _____

Mary and her sister saved their pocket money. Mary saved \$25 and her sister saved \$26. How much did they save altogether?



Answer: _____

Name: _____

Word Problems

Draw a picture in the box to help you solve the word problem.



Anna bought a banana cake. She had 14 bananas at the shop. How many did she have left?



Matthew had 66 flies buzzing around in a room. Matthew caught 1/3 of them. How many flies were left?



There were 14 birds in the tree in the morning and just 3 birds were left in the afternoon. How many birds had flown away?




Answer: _____



Name: _____



Word Problems



Draw a picture in the box to help you solve the word problem.

Joanna loves to read. She bought 8 books in April, 11 books in May and 20 books in April. How many books did she have altogether?



Answer: _____

Preview

There were 66 flies buzzing around in a room. Matthew swatted half of them. How many flies were left?



Answer: _____

Name: _____



Word Problems



Draw a picture in the box to help you solve the word problem.

There were 17 oranges, 12 apples and 8 bananas in the fruit bowl. How many pieces of fruit in the bowl altogether?



Answer: _____

Preview

There were 44 cookies in the cookie jar. Mary ate half of them and then her brother ate 10 more. How many were left in the jar?




Answer: _____

Name: _____



Word Problems



Draw a picture in the box to help you solve the word problem.

Sally wanted to bake a banana cake. She had 14 bananas and got 7 more from the shop. How many did she have altogether?



Answer: _____

Preview

There were 22 birds in the tree in the morning and just 14 in the tree in the afternoon. How many birds had flown away?




Answer: _____

Name: _____



Word Problems



Draw a picture in the box to help you solve the word problem.

Pam went fishing for 3 days. She caught 6 fish on each of the days. How many fish did she catch altogether?



Answer: _____

Preview

Paula went fishing for 6 days! She caught 27 fish, but 12 of them were too small so she threw them back in the water. She also ate 7. How many did she have left?




Answer: _____

Name: _____



Word Problems



Draw a picture in the box to help you solve the word problem.

At Sam's school there were 60 students. 25 new students came and then 12 more. How many students did they have altogether?



Answer: _____

Preview

There were 19 monkeys hanging from a tree. 11 of them fell off the tree. How many were left hanging from the tree?




Answer: _____

Name: _____



Word Problems



Draw a picture in the box to help you solve the word problem.

There were 14 street cats in the morning and 22 more came in the afternoon. How many streets cats were there altogether?



Answer: _____

Preview

Angela had 27 cupcakes but her little brother stole 11 of them and her sister ate 12 of them. How many did she have left?




Answer: _____

Name: _____



Word Problems



Draw a picture in the box to help you solve the word problem.

Simon and Peter played soccer for 20 minutes in the morning, 20 minutes in the afternoon and 20 minutes at night. How long did they play altogether?



Answer: _____

Preview

Mary and her sister saved their pocket money. Mary saved \$25 and her sister saved \$26. How much did they save altogether?




Answer: _____

Name: _____



Word Problems



Draw a picture in the box to help you solve the word problem.

There were 4 people in the Johnson family. Their dad bought them all an ice cream for \$3 each. How much did he pay for all of the ice creams?



Answer: _____

Preview

Maya had 40 toys! She was being bad, so her parents took half of her toys away. How many toys did she have left?




Answer: _____

Name: _____



Word Problems



Draw a picture in the box to help you solve the word problem.

Jack bought 3 toys. The toy truck was \$23, the toy car was \$7 and the toy tractor was \$12. How much did he pay for all of the toys?



Answer: _____

Preview

Simon had \$60! He bought a cat for \$9 and a dog for \$7. How much money did he have left?




Answer: _____

Name: _____



Word Problems



Draw a picture in the box to help you solve the word problem.

Alex got 8 presents from grandma, 11 presents from grandpa and 11 presents from his dad. How many presents did he get altogether?



Answer: _____

Preview

Sarah baked 34 cookies. She ate 9 and gave 5 to her dad. How many did she have left?



Answer: _____