

# Mental Maths

Includes:








- 10 weeks of daily mental maths
- Answer sheets
- Variety of mathematical concepts

Mathematical concepts:

- Addition
- Subtraction
- Writing numbers
- Numbers before & after
- Number patterns
- Picture subtraction
- Adding by 5 & 10
- Shapes
- Odd & even numbers









**Week 1**

**Mental Maths**

Monday	Tuesday	Wednesday	Thursday
1. $9 + 4 =$ _____	1. $8 + 7 =$ _____	1. $12 + 6 =$ _____	1. $8 + 8 =$ _____
2. $11 - 4 =$ _____	2. $16 - 6 =$ _____	2. $13 - 5 =$ _____	2. $19 - 7 =$ _____
3. How many  ? _____	3. How many  ? _____	3. How many  ? _____	3. How many  ? _____
4. How many  ? _____	4. How many  ? _____	4. How many  ? _____	4. How many  ? _____
5. How many altogether? _____	5. How many altogether? _____	5. How many altogether? _____	5. How many altogether? _____








**Week 6**

**Mental Maths**

Monday	Tuesday	Wednesday	Thursday
1. $18 + 5 =$ _____	1. $22 + 6 =$ _____	1. $8 + 6 =$ _____	1. $13 + 7 =$ _____
2. $12 - 5 =$ _____	2. $19 - 5 =$ _____	2. $16 - 5 =$ _____	2. $9 - 3 =$ _____
3. Add 5 more  _____	3. Add 5 more  _____	3. Add 5 more  _____	3. Add 5 more  _____
4. Add 10 more  _____	4. Add 10 more  _____	4. Add 10 more  _____	4. Add 10 more  _____
5. Draw an oval	5. Draw a rectangle	5. Draw a square	5. Draw a circle

**Week 10**

**Mental Maths**

Monday	Tuesday	Wednesday	Thursday
1. $10 + 10 =$ _____	1. $20 + 10 =$ _____	1. $11 + 8 =$ _____	1. $35 + 5 =$ _____
2. $20 - 6 =$ _____	2. $12 - 6 =$ _____	2. $18 - 10 =$ _____	2. $17 - 7 =$ _____
3. Add 5 more  _____	3. Add 5 more  _____	3. Add 5 more  _____	3. Add 5 more  _____
4. Add 10 more  _____	4. Add 10 more  _____	4. Add 10 more  _____	4. Add 10 more  _____
5. Draw a pentagon	5. Draw an oval	5. Draw a heart	5. Draw a star
6. Write the number twenty six _____	6. Write the number eighteen _____	6. Write the number thirty two _____	6. Write the number seven _____
7. What comes before 53? _____	7. What comes after 37? _____	7. What comes before 28? _____	7. What comes after 44? _____
8. 15, 16, ____, 18, 19	8. 41, 42, ____, 44, 45	8. 38, 39, ____, 41, 42	8. 25, 26, ____, 28, 29
9. 20 plus 10 = _____	9. 11 minus 4 = _____	9. 18 plus 5 = _____	9. 15 minus 5 = _____
10. Circle odd numbers 11 14 18 9 2 3	10. Circle even numbers 12 4 13 11 10 2	10. Circle odd numbers 15 13 6 4 1 12	10. Circle even numbers 18 19 13 14 8 1


# Mental Maths

## Monday

1.  $9 + 4 =$  \_\_\_\_\_

2.  $11 - 4 =$  \_\_\_\_\_



3. How many ? \_\_\_\_\_


4. How many ? \_\_\_\_\_

5. How many altogether? \_\_\_\_\_

6. Write the number nine \_\_\_\_\_

7. What comes before 33? \_\_\_\_\_

8. 2, 3, 4, \_\_\_\_\_, 6, 7, 8




9. Cross out half the puppies. How many left? \_\_\_\_\_

## Tuesday

1.  $8 + 7 =$  \_\_\_\_\_

2.  $16 - 6 =$  \_\_\_\_\_



3. How many ? \_\_\_\_\_


4. How many ? \_\_\_\_\_

5. How many altogether? \_\_\_\_\_

6. Write the number thirteen \_\_\_\_\_

7. What comes after 26? \_\_\_\_\_

8. 5, 6, \_\_\_\_\_, 8, 9, 10




9. Cross out four puppies. How many left? \_\_\_\_\_

## Wednesday

1.  $12 + 6 =$  \_\_\_\_\_

2.  $13 - 5 =$  \_\_\_\_\_



3. How many ? \_\_\_\_\_


4. How many ? \_\_\_\_\_

5. How many altogether? \_\_\_\_\_

6. Write the number eleven \_\_\_\_\_

7. What comes before 39? \_\_\_\_\_

8. 10, 11, \_\_\_\_\_, 13, 14




9. Cross out seven puppies. How many left? \_\_\_\_\_

## Thursday

1.  $8 + 8 =$  \_\_\_\_\_

2.  $19 - 7 =$  \_\_\_\_\_



3. How many ? \_\_\_\_\_


4. How many ? \_\_\_\_\_

5. How many altogether? \_\_\_\_\_

6. Write the number twenty \_\_\_\_\_

7. What comes after 43? \_\_\_\_\_

8. 19, 20, \_\_\_\_\_, 22, 23



9. Cross out eight puppies. How many left? \_\_\_\_\_

Preview


# Mental Maths

## Monday

1.  $8 + 6 = \underline{\quad}$

2.  $19 - 8 = \underline{\quad}$



3. How many ?  $\underline{\quad}$

4. How many ?  $\underline{\quad}$

5. How many altogether?  $\underline{\quad}$

6. Write the number seventeen  $\underline{\quad}$

7. What comes before 16?  $\underline{\quad}$

8. 13, 14,  $\underline{\quad}$ , 16, 17, 18




9. Cross out two puppies. How many left?  $\underline{\quad}$

## Tuesday

1.  $11 + 5 = \underline{\quad}$

2.  $18 - 5 = \underline{\quad}$



3. How many ?  $\underline{\quad}$

4. How many ?  $\underline{\quad}$

5. How many altogether?  $\underline{\quad}$

6. Write the number five  $\underline{\quad}$

7. What comes after 33?  $\underline{\quad}$

8. 31, 32,  $\underline{\quad}$ , 34, 35




9. Cross out nine puppies. How many left?  $\underline{\quad}$


## Wednesday

1.  $6 + 13 = \underline{\quad}$

2.  $9 - 7 = \underline{\quad}$



3. How many ?  $\underline{\quad}$

4. How many ?  $\underline{\quad}$

5. How many altogether?  $\underline{\quad}$

6. Write the number ten  $\underline{\quad}$

7. What comes before 22?  $\underline{\quad}$

8. 8, 9,  $\underline{\quad}$ , 11, 12



9. Cross out three puppies. How many left?  $\underline{\quad}$

## Thursday

1.  $7 + 7 = \underline{\quad}$

2.  $15 - 6 = \underline{\quad}$



3. How many ?  $\underline{\quad}$

4. How many ?  $\underline{\quad}$

5. How many altogether?  $\underline{\quad}$

6. Write the number sixteen  $\underline{\quad}$

7. What comes after 27?  $\underline{\quad}$

8. 23, 24,  $\underline{\quad}$ , 26, 27



9. Cross out one puppy. How many left?  $\underline{\quad}$

Preview


# Mental Maths

## Monday

1.  $13 + 5 = \underline{\quad}$

2.  $15 - 5 = \underline{\quad}$



3. How many ?  $\underline{\quad}$


4. How many ?  $\underline{\quad}$

5. How many altogether?  $\underline{\quad}$

6. Write the number fourteen  $\underline{\quad}$

7. What comes before 20?  $\underline{\quad}$

8. 10,  $\underline{\quad}$ , 12, 13, 14



9. Cross out three puppies. How many left?  $\underline{\quad}$

## Tuesday

1.  $4 + 6 = \underline{\quad}$

2.  $12 - 6 = \underline{\quad}$



3. How many ?  $\underline{\quad}$


4. How many ?  $\underline{\quad}$

5. How many altogether?  $\underline{\quad}$

6. Write the number nine  $\underline{\quad}$

7. What comes after 27?  $\underline{\quad}$

8. 19,  $\underline{\quad}$ , 21, 22, 23




9. Cross out eight puppies. How many left?  $\underline{\quad}$

## Wednesday

1.  $14 + 4 = \underline{\quad}$

2.  $14 - 5 = \underline{\quad}$



3. How many ?  $\underline{\quad}$

4. How many ?  $\underline{\quad}$

5. How many altogether?  $\underline{\quad}$

6. Write the number twelve  $\underline{\quad}$

7. What comes before 19?  $\underline{\quad}$

8. 3,  $\underline{\quad}$ , 5, 6, 7, 8



9. Cross out two puppies. How many left?  $\underline{\quad}$

## Thursday

1.  $9 + 6 = \underline{\quad}$

2.  $9 - 4 = \underline{\quad}$



3. How many ?  $\underline{\quad}$

4. How many ?  $\underline{\quad}$

5. How many altogether?  $\underline{\quad}$

6. Write the number seventeen  $\underline{\quad}$

7. What comes after 36?  $\underline{\quad}$

8. 32,  $\underline{\quad}$ , 34, 35



9. Cross out five puppies. How many left?  $\underline{\quad}$

Preview


# Mental Maths

## Monday

1.  $15 + 5 = \underline{\quad}$

2.  $18 - 4 = \underline{\quad}$



3. How many ?  $\underline{\quad}$


4. How many ?  $\underline{\quad}$

5. How many altogether?  $\underline{\quad}$

6. Write the number fifteen  $\underline{\quad}$

7. What comes before 36?  $\underline{\quad}$

8. 25, 26,  $\underline{\quad}$ , 28, 29




9. Cross out two puppies. How many left?  $\underline{\quad}$

## Tuesday

1.  $9 + 7 = \underline{\quad}$

2.  $10 - 5 = \underline{\quad}$



3. How many ?  $\underline{\quad}$

4. How many ?  $\underline{\quad}$

5. How many altogether?  $\underline{\quad}$

6. Write the number seven  $\underline{\quad}$

7. What comes after 41?  $\underline{\quad}$

8. 30, 31,  $\underline{\quad}$ , 33, 34




9. Cross out six puppies. How many left?  $\underline{\quad}$

## Wednesday

1.  $11 + 6 = \underline{\quad}$

2.  $19 - 7 = \underline{\quad}$



3. How many ?  $\underline{\quad}$


4. How many ?  $\underline{\quad}$

5. How many altogether?  $\underline{\quad}$

6. Write the number eleven  $\underline{\quad}$

7. What comes before 28?  $\underline{\quad}$

8. 2, 3,  $\underline{\quad}$ , 5, 6, 7




9. Cross out one puppy. How many left?  $\underline{\quad}$

## Thursday

1.  $6 + 6 = \underline{\quad}$

2.  $8 - 5 = \underline{\quad}$



3. How many ?  $\underline{\quad}$


4. How many ?  $\underline{\quad}$

5. How many altogether?  $\underline{\quad}$

6. Write the number eighteen  $\underline{\quad}$

7. What comes after 39?  $\underline{\quad}$

8. 17, 18,  $\underline{\quad}$ , 20, 21



9. Cross out four puppies. How many left?  $\underline{\quad}$

Preview


# Mental Maths

## Monday

1.  $12 + 7 = \underline{\quad}$

2.  $18 - 9 = \underline{\quad}$



3. How many ?  $\underline{\quad}$


4. How many ?  $\underline{\quad}$

5. How many altogether?  $\underline{\quad}$

6. Write the number thirteen  $\underline{\quad}$

7. What comes before 32?  $\underline{\quad}$

8. 51, 52, 53,  $\underline{\quad}$ , 55



9. Cross out three puppies. How many left?  $\underline{\quad}$

## Tuesday

1.  $11 + 6 = \underline{\quad}$

2.  $16 - 8 = \underline{\quad}$



3. How many ?  $\underline{\quad}$


4. How many ?  $\underline{\quad}$

5. How many altogether?  $\underline{\quad}$

6. Write the number twenty  $\underline{\quad}$

7. What comes after 21?  $\underline{\quad}$

8. 13, 14,  $\underline{\quad}$ , 16, 17, 18



9. Cross out four puppies. How many left?  $\underline{\quad}$

## Wednesday

1.  $13 + 7 = \underline{\quad}$

2.  $19 - 4 = \underline{\quad}$



3. How many ?  $\underline{\quad}$

4. How many ?  $\underline{\quad}$

5. How many altogether?  $\underline{\quad}$

6. Write the number twelve  $\underline{\quad}$

7. What comes before 55?  $\underline{\quad}$

8. 44, 45,  $\underline{\quad}$ , 47, 48



9. Cross out seven puppy. How many left?  $\underline{\quad}$

## Thursday

1.  $9 + 5 = \underline{\quad}$

2.  $15 - 4 = \underline{\quad}$



3. How many ?  $\underline{\quad}$


4. How many ?  $\underline{\quad}$

5. How many altogether?  $\underline{\quad}$

6. Write the number fourteen  $\underline{\quad}$

7. What comes after 61?  $\underline{\quad}$

8. 27, 28,  $\underline{\quad}$ , 30, 31



9. Cross out six puppies. How many left?  $\underline{\quad}$

Preview


# Mental Maths


## Monday

1.  $18 + 5 = \underline{\quad}$

2.  $12 - 5 = \underline{\quad}$



3. Add 5 more   $\underline{\quad}$

4. Add 10 more   $\underline{\quad}$

5. Draw an oval

6. Write the number twenty two  $\underline{\quad}$

7. What comes before 45?  $\underline{\quad}$

8. 36, 37,  $\underline{\quad}$ , 39, 40, 41

9. 10 plus 10 =  $\underline{\quad}$

10. Circle odd numbers


2 3 7 4 6 9


## Tuesday

1.  $22 + 6 = \underline{\quad}$

2.  $19 - 5 = \underline{\quad}$



3. Add 5 more   $\underline{\quad}$

4. Add 10 more   $\underline{\quad}$

5. Draw a rectangle

6. Write the number thirty  $\underline{\quad}$

7. What comes after 17?  $\underline{\quad}$

8. 13, 14,  $\underline{\quad}$ , 16, 17, 18

9. 13 minus 5 =  $\underline{\quad}$

10. Circle even numbers

4 1 5 6 8 10


## Wednesday

1.  $8 + 6 = \underline{\quad}$

2.  $16 - 5 = \underline{\quad}$



3. Add 5 more   $\underline{\quad}$

4. Add 10 more   $\underline{\quad}$

5. Draw a square

6. Write the number twenty six  $\underline{\quad}$

7. What comes before 50?  $\underline{\quad}$

8. 41, 42,  $\underline{\quad}$ , 44, 45

9. 20 plus 10 =  $\underline{\quad}$

10. Circle odd numbers


8 7 6 5 4 3


## Thursday

1.  $13 + 7 = \underline{\quad}$

2.  $9 - 3 = \underline{\quad}$



3. Add 5 more   $\underline{\quad}$

4. Add 10 more   $\underline{\quad}$

5. Draw a circle

6. Write the number sixteen  $\underline{\quad}$

7. What comes after 33?  $\underline{\quad}$

8. 50, 51,  $\underline{\quad}$ , 53, 54, 55

9. 20 minus 10 =  $\underline{\quad}$

10. Circle even numbers

2 3 9 11 14 10

Preview


# Mental Maths


## Monday

1.  $22 + 7 =$  \_\_\_\_\_

2.  $12 - 5 =$  \_\_\_\_\_



3. Add 5 more  \_\_\_\_\_

4. Add 10 more  \_\_\_\_\_

5. Draw a star

6. Write the number thirty five \_\_\_\_\_

7. What comes before 18? \_\_\_\_\_

8. 17, 18, \_\_\_\_\_, 20, 21

9. 8 plus 8 = \_\_\_\_\_

10. Circle odd numbers

12 13 15 17 18


## Tuesday

1.  $21 + 8 =$  \_\_\_\_\_

2.  $19 - 7 =$  \_\_\_\_\_



3. Add 5 more  \_\_\_\_\_

4. Add 10 more  \_\_\_\_\_

5. Draw a pentagon

6. Write the number twenty one \_\_\_\_\_

7. What comes after 55? \_\_\_\_\_

8. 33, 34, \_\_\_\_\_, 36, 37, 38

9. 15 minus 6 = \_\_\_\_\_

10. Circle even numbers


9 4 11 8 14 13


## Wednesday

1.  $32 + 6 =$  \_\_\_\_\_

2.  $24 - 6 =$  \_\_\_\_\_



3. Add 5 more  \_\_\_\_\_

4. Add 10 more  \_\_\_\_\_

5. Draw a triangle

6. Write the number eleven \_\_\_\_\_

7. What comes before 42? \_\_\_\_\_

8. 54, 55, \_\_\_\_\_, 57, 58

9. 10 plus 8 = \_\_\_\_\_

10. Circle odd numbers


8 3 2 1 10 11


## Thursday

1.  $10 + 9 =$  \_\_\_\_\_

2.  $11 - 6 =$  \_\_\_\_\_



3. Add 5 more  \_\_\_\_\_

4. Add 10 more  \_\_\_\_\_

5. Draw an oval

6. Write the number twenty five \_\_\_\_\_

7. What comes after 45? \_\_\_\_\_

8. 22, 23, \_\_\_\_\_, 25, 26

9. 13 minus 5 = \_\_\_\_\_

10. Circle even numbers

15 16 7 5 11 14

Preview





# Mental Maths


## Monday

1.  $14 + 6 =$  \_\_\_\_\_

2.  $15 - 6 =$  \_\_\_\_\_



3. Add 5 more  \_\_\_\_\_

4. Add 10 more  \_\_\_\_\_

5. Draw a heart

6. Write the number twenty six \_\_\_\_\_

7. What comes before 23? \_\_\_\_\_

8. 25, 26, \_\_\_\_\_, 28, 29

9. 10 plus 5 = \_\_\_\_\_

10. Circle odd numbers

10 14 12 13 19


## Tuesday

1.  $25 + 5 =$  \_\_\_\_\_

2.  $25 - 5 =$  \_\_\_\_\_



3. Add 5 more  \_\_\_\_\_

4. Add 10 more  \_\_\_\_\_

5. Draw a rectangle

6. Write the number thirty three \_\_\_\_\_

7. What comes after 36? \_\_\_\_\_

8. 31, \_\_\_\_\_, 33, 34, 35

9. 25 minus 9 = \_\_\_\_\_

10. Circle even numbers

6 5 12 8 11 17


## Wednesday

1.  $22 + 7 =$  \_\_\_\_\_

2.  $18 - 6 =$  \_\_\_\_\_



3. Add 5 more  \_\_\_\_\_

4. Add 10 more  \_\_\_\_\_

5. Draw a square

6. Write the number fifteen \_\_\_\_\_

7. What comes before 40? \_\_\_\_\_

8. 50, 51, \_\_\_\_\_, 53, 54

9. 20 plus 8 = \_\_\_\_\_

10. Circle odd numbers


7 3 6 11 8 13


## Thursday

1.  $13 + 8 =$  \_\_\_\_\_

2.  $14 - 7 =$  \_\_\_\_\_



3. Add 5 more  \_\_\_\_\_

4. Add 10 more  \_\_\_\_\_

5. Draw a pentagon

6. Write the number twenty seven \_\_\_\_\_

7. What comes after 52? \_\_\_\_\_

8. 17, 18, \_\_\_\_\_, 20, 21

9. 14 minus 6 = \_\_\_\_\_

10. Circle even numbers

8 14 7 9 11 12


Preview


# Mental Maths


## Monday

1.  $9 + 9 =$  \_\_\_\_\_

2.  $18 - 4 =$  \_\_\_\_\_



3. Add 5 more  \_\_\_\_\_

4. Add 10 more  \_\_\_\_\_

5. Draw a square

6. Write the number thirty five \_\_\_\_\_

7. What comes before 44? \_\_\_\_\_

8. 31, 32, \_\_\_\_\_, 34, 35

9. 12 plus 7 = \_\_\_\_\_

10. Circle odd numbers


7 15 3 6 8 9


## Tuesday

1.  $23 + 7 =$  \_\_\_\_\_

2.  $35 - 5 =$  \_\_\_\_\_



3. Add 5 more  \_\_\_\_\_

4. Add 10 more  \_\_\_\_\_

5. Draw a star

6. Write the number fifteen \_\_\_\_\_

7. What comes after 23? \_\_\_\_\_

8. 14, 15, \_\_\_\_\_, 17, 18

9. 20 minus 5 = \_\_\_\_\_

10. Circle even numbers


13 4 12 10 7


## Wednesday

1.  $20 + 10 =$  \_\_\_\_\_

2.  $27 - 6 =$  \_\_\_\_\_



3. Add 5 more  \_\_\_\_\_

4. Add 10 more  \_\_\_\_\_

5. Draw a pentagon

6. Write the number twenty nine \_\_\_\_\_

7. What comes before 17? \_\_\_\_\_

8. 47, 48, \_\_\_\_\_, 50, 51

9. 6 plus 6 = \_\_\_\_\_

10. Circle odd numbers

1 6 8 11 13 10


## Thursday

1.  $7 + 7 =$  \_\_\_\_\_

2.  $15 - 6 =$  \_\_\_\_\_



3. Add 5 more  \_\_\_\_\_

4. Add 10 more  \_\_\_\_\_

5. Draw a triangle

6. Write the number twelve \_\_\_\_\_

7. What comes after 49? \_\_\_\_\_

8. 22, 23, \_\_\_\_\_, 25, 26

9. 10 minus 8 = \_\_\_\_\_

10. Circle even numbers

14 15 11 8 18 1

Preview

# Mental Maths


## Monday

1.  $10 + 10 =$  \_\_\_\_\_

2.  $20 - 6 =$  \_\_\_\_\_



3. Add 5 more  \_\_\_\_\_

4. Add 10 more  \_\_\_\_\_

5. Draw a pentagon

6. Write the number twenty six \_\_\_\_\_

7. What comes before 53? \_\_\_\_\_

8. 15, 16, \_\_\_\_\_, 18, 19

9. 20 plus 10 = \_\_\_\_\_

10. Circle odd numbers

11 14 18 9 2 3


## Tuesday

1.  $20 + 10 =$  \_\_\_\_\_

2.  $12 - 6 =$  \_\_\_\_\_



3. Add 5 more  \_\_\_\_\_

4. Add 10 more  \_\_\_\_\_

5. Draw an oval

6. Write the number eighteen \_\_\_\_\_

7. What comes after 37? \_\_\_\_\_

8. 41, 42, \_\_\_\_\_, 44, 45

9. 11 minus 4 = \_\_\_\_\_

10. Circle even numbers


12 4 13 11 10 2


## Wednesday

1.  $11 + 8 =$  \_\_\_\_\_

2.  $18 - 10 =$  \_\_\_\_\_



3. Add 5 more  \_\_\_\_\_

4. Add 10 more  \_\_\_\_\_

5. Draw a heart

6. Write the number thirty two \_\_\_\_\_

7. What comes before 28? \_\_\_\_\_

8. 38, 39, \_\_\_\_\_, 41, 42

9. 18 plus 5 = \_\_\_\_\_

10. Circle odd numbers


15 13 6 4 1 12


## Thursday

1.  $35 + 5 =$  \_\_\_\_\_

2.  $17 - 7 =$  \_\_\_\_\_



3. Add 5 more  \_\_\_\_\_

4. Add 10 more  \_\_\_\_\_

5. Draw a star

6. Write the number seven \_\_\_\_\_

7. What comes after 44? \_\_\_\_\_

8. 25, 26, \_\_\_\_\_, 28, 29

9. 15 minus 5 = \_\_\_\_\_

10. Circle even numbers

18 19 13 14 8 1

Preview

# Mental Maths

## Monday

- 1.  $9 + 4 = 13$
- 2.  $11 - 4 = 7$



- 3. How many ? 3
- 4. How many ? 3

- 5. How many altogether? 6
- 6. Write the number nine - 9
- 7. What comes before 33? 32
- 8. 2, 3, 4, 5, 6, 7, 8



- 9. Cross out half the puppies. How many left? 5

## Tuesday

- 1.  $8 + 7 = 15$
- 2.  $16 - 6 = 10$



- 3. How many ? 4
- 4. How many ? 1

- 5. How many altogether? 5
- 6. Write the number thirteen - 13
- 7. What comes after 26? 27
- 8. 5, 6, 7, 8, 9, 10



- 9. Cross out four puppies. How many left? 6

## Wednesday

- 1.  $12 + 6 = 18$
- 2.  $13 - 5 = 8$



- 3. How many ? 1
- 4. How many ? 3

- 5. How many altogether? 4
- 6. Write the number eleven - 11
- 7. What comes before 39? 38
- 8. 10, 11, 12, 13, 14



- 9. Cross out seven puppies. How many left? 3

## Thursday

- 1.  $8 + 8 = 16$
- 2.  $19 - 7 = 12$



- 3. How many ? 1
- 4. How many ? 5

- 5. How many altogether? 6
- 6. Write the number twenty - 20
- 7. What comes after 43? 44
- 8. 19, 20, 21, 22, 23



- 9. Cross out eight puppies. How many left? 2

Preview

# Mental Maths

## Monday

1.  $8 + 6 = 14$

2.  $19 - 8 = 11$



3. How many ? 4

4. How many ? 2

5. How many altogether? 6

6. Write the number seventeen - 17

7. What comes before 16? 15

8. 13, 14, 15, 16, 17, 18



9. Cross out two puppies. How many left? 8

## Tuesday

1.  $11 + 5 = 16$

2.  $18 - 5 = 13$



3. How many ? 3

4. How many ? 2

5. How many altogether? 5

6. Write the number five - 5

7. What comes after 33? 34

8. 31, 32, 33, 34, 35




9. Cross out nine puppies. How many left? 1

## Wednesday

1.  $6 + 13 = 19$

2.  $9 - 7 = 2$



3. How many ? 3

4. How many ? 3

5. How many altogether? 6

6. Write the number ten - 10

7. What comes before 22? 21

8. 8, 9, 10, 11, 12




9. Cross out three puppies. How many left? 7

## Thursday

1.  $7 + 7 = 14$

2.  $15 - 6 = 9$



3. How many ? 1


4. How many ? 3

5. How many altogether? 4

6. Write the number sixteen - 16

7. What comes after 27? 28

8. 23, 24, 25, 26, 27



9. Cross out one puppies. How many left? 9

Preview

# Mental Maths

## Monday

1.  $13 + 5 = 18$

2.  $15 - 5 = 10$



3. How many ? 2

4. How many ? 2

5. How many altogether? 4

6. Write the number fourteen - 14

7. What comes before 20? 19

8. 10, 11, 12, 13, 14



9. Cross out three puppies. How many left? 7

## Tuesday

1.  $4 + 6 = 10$

2.  $12 - 6 = 6$



3. How many ? 2

4. How many ? 3

5. How many altogether? 5

6. Write the number nine - 9

7. What comes after 27? 28

8. 19, 20, 21, 22, 23



9. Cross out eight puppies. How many left? 2

## Wednesday

1.  $14 + 4 = 18$

2.  $14 - 5 = 9$



3. How many ? 5

4. How many ? 1

5. How many altogether? 6

6. Write the number twelve - 12

7. What comes before 19? 18

8. 3, 4, 5, 6, 7, 8



9. Cross out two puppies. How many left? 8

## Thursday

1.  $9 + 6 = 15$

2.  $9 - 4 = 5$



3. How many ? 2

4. How many ? 3

5. How many altogether? 5

6. Write the number seventeen - 17

7. What comes after 36? 37

8. 32, 33, 34, 35



9. Cross out five puppies. How many left? 5

Preview

# Mental Maths

## Monday

1.  $15 + 5 = 20$

2.  $18 - 4 = 14$



3. How many ? 4

4. How many ? 2

5. How many altogether? 6

6. Write the number fifteen - 15

7. What comes before 36? 35

8. 25, 26, 27, 28, 29




9. Cross out two puppies. How many left? 8

## Tuesday

1.  $9 + 7 = 16$

2.  $10 - 5 = 5$



3. How many ? 1

4. How many ? 4

5. How many altogether? 5

6. Write the number seven - 7

7. What comes after 41? 42

8. 30, 31, 32, 33, 34




9. Cross out six puppies. How many left? 4

## Wednesday

1.  $11 + 6 = 17$

2.  $19 - 7 = 12$



3. How many ? 3

4. How many ? 1

5. How many altogether? 4

6. Write the number eleven - 11

7. What comes before 28? 27

8. 2, 3, 4, 5, 6, 7




9. Cross out one puppy. How many left? 9

## Thursday

1.  $6 + 6 = 12$

2.  $8 - 5 = 3$



3. How many ? 2

4. How many ? 4

5. How many altogether? 6

6. Write the number eighteen - 18

7. What comes after 39? 40

8. 17, 18, 19, 20, 21



9. Cross out four puppies. How many left? 6

Preview

# Mental Maths

## Monday

1.  $12 + 7 = 19$

2.  $18 - 9 = 9$



3. How many ? 5

4. How many ? 1

5. How many altogether? 6

6. Write the number thirteen - 13

7. What comes before 32? 31

8. 51, 52, 53, 54, 55, 56



9. Cross out three puppies. How many left? 7

## Tuesday

1.  $11 + 6 = 17$

2.  $16 - 8 = 8$



3. How many ? 3

4. How many ? 3

5. How many altogether? 6

6. Write the number twenty - 13

7. What comes after 21? 22

8. 13, 14, 15, 16, 17, 18




9. Cross out four puppies. How many left? 6

## Wednesday

1.  $13 + 7 = 20$

2.  $19 - 4 = 15$



3. How many ? 2

4. How many ? 4

5. How many altogether? 6

6. Write the number twelve - 12

7. What comes before 55? 54

8. 44, 45, 46, 47, 48




9. Cross out seven puppies. How many left? 3


## Thursday

1.  $9 + 5 = 14$

2.  $15 - 4 = 11$



3. How many ? 3

4. How many ? 2

5. How many altogether? 5

6. Write the number fourteen - 14

7. What comes after 61? 62

8. 27, 28, 29, 30, 31



9. Cross out six puppies. How many left? 4

Preview




# Mental Maths


## Monday

1.  $18 + 5 = 23$


2.  $12 - 5 = 7$



3. Add 5 more  11

4. Add 10 more  16

5. Draw an oval



6. Write the number twenty two - 22

7. What comes before 45? 44

8. 36, 37, 38, 39, 40, 41

9. 10 plus 10 = 20

10. Circle odd numbers


2 **3** **7** 4 6 **9**


## Tuesday

1.  $22 + 6 = 28$

2.  $19 - 5 = 14$



3. Add 5 more  10

4. Add 10 more  15

5. Draw a rectangle



6. Write the number thirty - 30

7. What comes after 17? 18

8. 13, 14, 15, 16, 17, 18

9. 13 minus 5 = 8

10. Circle even numbers


**4** 1 5 **6** **8** **10**


## Wednesday

1.  $8 + 6 = 14$

2.  $16 - 5 = 11$



3. Add 5 more  8

4. Add 10 more  13

5. Draw a square



6. Write the number twenty six - 26

7. What comes before 50? 49

8. 41, 42, 43, 44, 45

9. 20 plus 10 = 30

10. Circle odd numbers


8 **7** 6 **5** 4 **3**


## Thursday

1.  $13 + 7 = 20$


2.  $9 - 3 = 6$



3. Add 5 more  9

4. Add 10 more  14

5. Draw a circle



6. Write the number sixteen - 16

7. What comes after 33? 34

8. 50, 51, 52, 53, 54, 55

9. 20 minus 10 = 10

10. Circle even numbers

**2** 3 9 11 **14** **10**


# Mental Maths


## Monday

1.  $22 + 7 = 29$

2.  $12 - 5 = 7$



3. Add 5 more  9

4. Add 10 more  14

5. Draw a star



6. Write the number thirty five - 35

7. What comes before 18? 17

8. 17, 18, 19, 20, 21

9. 8 plus 8 = 16

10. Circle odd numbers


12 13 15 17 18


## Tuesday

1.  $21 + 8 = 29$

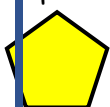
2.  $19 - 7 = 12$



3. Add 5 more  9

4. Add 10 more  14

5. Draw a pentagon



6. Write the number twenty one - 21

7. What comes after 55? 56

8. 33, 34, 35, 36, 37, 38

9. 15 minus 6 = 9

10. Circle even numbers


9 4 11 8 14 13


## Wednesday

1.  $32 + 6 = 38$

2.  $24 - 6 = 18$



3. Add 5 more  9

4. Add 10 more  14

5. Draw a triangle



6. Write the number eleven - 11

7. What comes before 42? 41

8. 54, 55, 56, 57, 58

9. 10 plus 8 = 18

10. Circle odd numbers


8 3 2 1 10 11


## Thursday

1.  $10 + 9 = 19$


2.  $11 - 6 = 5$



3. Add 5 more  10

4. Add 10 more  15

5. Draw an oval



6. Write the number twenty five - 25

7. What comes after 45? 46

8. 22, 23, 24, 25, 26

9. 13 minus 5 = 8

10. Circle even numbers


15 16 7 5 11 14


# Mental Maths


## Monday

1.  $14 + 6 = 20$

2.  $15 - 6 = 9$



3. Add 5 more  11

4. Add 10 more  16

5. Draw a heart



6. Write the number twenty six - 26

7. What comes before 23? 22

8. 25, 26, 27, 28, 29

9. 10 plus 5 = 15

10. Circle odd numbers


10 14 12 **13** **19**


## Tuesday

1.  $25 + 5 = 30$

2.  $25 - 5 = 20$



3. Add 5 more  8

4. Add 10 more  13

5. Draw a rectangle



6. Write the number thirty three - 33

7. What comes after 36? 37

8. 31, 32, 33, 34, 35

9. 25 minus 9 = 16

10. Circle even numbers


**6** 5 **12** **8** 11 17


## Wednesday

1.  $22 + 7 = 29$

2.  $18 - 6 = 12$



3. Add 5 more  10

4. Add 10 more  15

5. Draw a square



6. Write the number fifteen - 15

7. What comes before 40? 39

8. 50, 51, 52, 53, 54

9. 20 plus 8 = 28

10. Circle odd numbers


**7** **3** 6 **11** 8 **13**


## Thursday

1.  $13 + 8 = 24$

2.  $14 - 7 = 7$



3. Add 5 more  9

4. Add 10 more  14

5. Draw a pentagon



6. Write the number twenty seven - 27

7. What comes after 52? 53

8. 17, 18, 19, 20, 21

9. 14 minus 6 = 8

10. Circle even numbers

**8** **14** 7 9 11 **12**


# Mental Maths


## Monday

1.  $9 + 9 = 18$

2.  $18 - 4 = 14$



3. Add 5 more  8

4. Add 10 more  13

5. Draw a square



6. Write the number thirty five - 35

7. What comes before 44? 43

8. 31, 32, 33, 34, 35

9. 12 plus 7 = 19

10. Circle odd numbers


7 15 3 6 8 9


## Tuesday

1.  $23 + 7 = 30$

2.  $35 - 5 = 30$



3. Add 5 more  9

4. Add 10 more  14

5. Draw a star



6. Write the number fifteen - 15

7. What comes after 23? 24

8. 14, 15, 16, 17, 18

9. 20 minus 5 = 15

10. Circle even numbers


13 4 12 10 7


## Wednesday

1.  $20 + 10 = 30$

2.  $27 - 6 = 21$



3. Add 5 more  10

4. Add 10 more  15

5. Draw a pentagon



6. Write the number twenty nine - 29

7. What comes before 17? 16

8. 47, 48, 49, 50, 51

9. 6 plus 6 = 12

10. Circle odd numbers


1 6 8 11 13 10


## Thursday

1.  $7 + 7 = 14$


2.  $15 - 6 = 9$



3. Add 5 more  10

4. Add 10 more  15

5. Draw a triangle



6. Write the number twelve - 12

7. What comes after 49? 50

8. 22, 23, 24, 25, 26

9. 10 minus 8 = 2

10. Circle even numbers

14 15 11 8 18 1


# Mental Maths


## Monday

1.  $10 + 10 = 20$

2.  $20 - 6 = 14$



3. Add 5 more  10

4. Add 10 more  15

5. Draw a pentagon



6. Write the number twenty six - 26

7. What comes before 53? 52

8. 15, 16, 17, 18, 19

9. 20 plus 10 = 30

10. Circle odd numbers


11 14 18 9 2 3


## Tuesday

1.  $20 + 10 = 30$


2.  $12 - 6 = 6$



3. Add 5 more  8

4. Add 10 more  13

5. Draw an oval



6. Write the number eighteen - 18

7. What comes after 37? 38

8. 41, 42, 43, 44, 45

9. 11 minus 4 = 7

10. Circle even numbers


12 4 13 11 10 2


## Wednesday

1.  $11 + 8 = 19$

2.  $18 - 10 = 8$



3. Add 5 more  9

4. Add 10 more  14

5. Draw a heart



6. Write the number thirty two - 32

7. What comes before 28? 27

8. 38, 39, 40, 41, 42

9. 18 plus 5 = 23

10. Circle odd numbers


15 13 6 4 1 12


## Thursday

1.  $35 + 5 = 40$

2.  $17 - 7 = 10$



3. Add 5 more  8

4. Add 10 more  13

5. Draw a star



6. Write the number seven - 7

7. What comes after 44? 45

8. 25, 26, 27, 28, 29

9. 15 minus 5 = 20

10. Circle even numbers

18 19 13 14 8 1